

Time: 10 Minutes


Paper Math 5

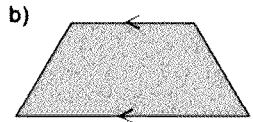
Total Marks: 10

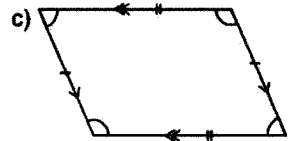
5th Month, 2nd Week, 3rd Day | Syllabus: Unit 7: Ex. # 3 Q. # 1

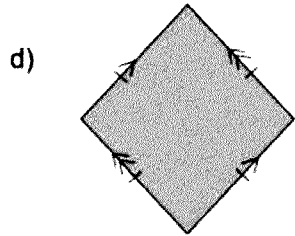
Q.No.1. Label the following quadrilaterals and describe at least two properties of each: (10)

سوال نمبر 1: درج ذیل چوکوروں کو لیبل کریں اور ہر ایک کی کم از کم دو خصوصیات لکھیں:











---



---



---



---



---

Time: 10 Minutes

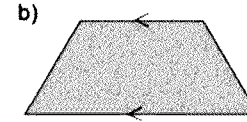
Paper Math 5

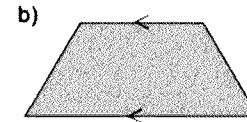
Total Marks: 10

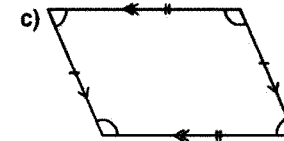
5th Month, 2nd Week, 3rd Day | Syllabus: Unit 7: Ex. # 3 Q. # 1

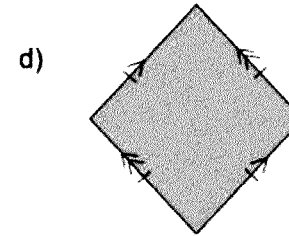
Q.No.1. Label the following quadrilaterals and describe at least two properties of each: (10)

سوال نمبر 1: درج ذیل چوکوروں کو لیبل کریں اور ہر ایک کی کم از کم دو خصوصیات لکھیں:











---



---



---



---



---